



AnandNiketan

Maninagar Campus

Grade : II	Subject : Math	Date : 18-06-19
Name :	Practice Worksheet - I	Chapter No. : 1 & 2
Syllabus for PT-1 Ch-1 Numbers up to 1000 Ch -2 Addition	Written Test - 20 marks Date : 25-06-19	Assessment activity First in Math – 10 Marks Math lab - 5 marks Mental math - 5 marks (25-06-19)

Q1. Multiple choice question:

- 1) The number name of 43
(a) Fourty three (b) Forty three (c) Four three
- 2) Write twelve in numbers _____.
(a) 12 (b) 21 (c) 2
- 3) Write number for 3 tens and 5 ones _____
(a) 35 (b) 53 (c) 30
- 4) Add $15+5 =$ _____
(a) 155 (b) 15 (c) 20
- 5) The biggest 3 digit number is _____
(a) 111 (b)999 (c)100
- 5) Write the missing number for $644 +$ _____ $=744$
(a) 100 (b)10 (c) 1
- 6) Write the number $600+0+9 =$ _____
(a) 609 (b)6009 (c) 69
- 7) The smallest 3 digit number is _____
(a) 100 (b) 999 (c) 111

Q2. Write After, before and between:

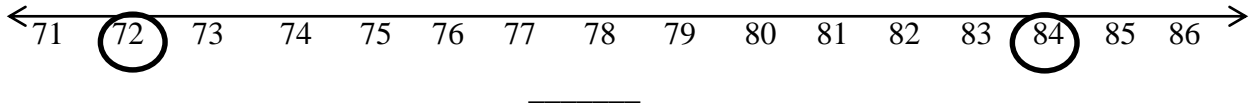
659		661
	663	
		667

944		946
947		
		952

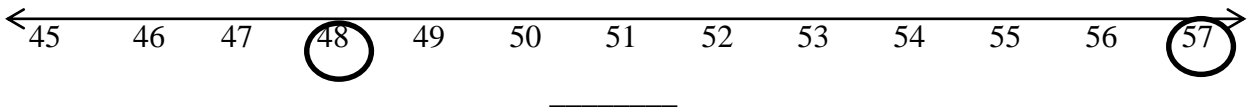
121		123
	125	
127		

Q3. Fill in the blanks using $<$, $>$ or $=$ sign

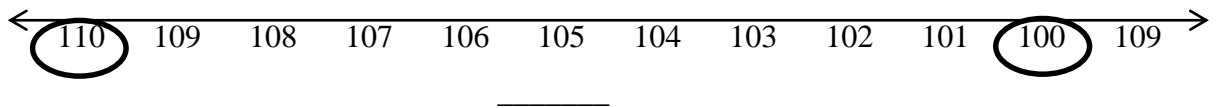
1)



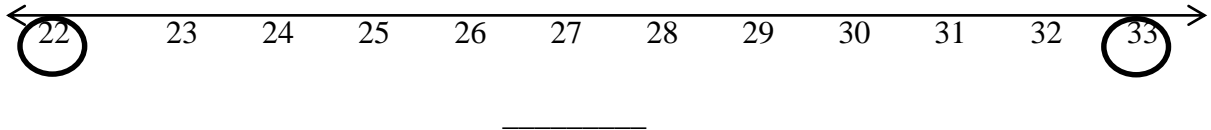
2)



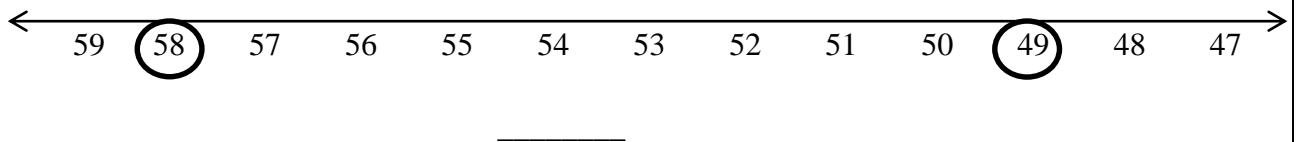
3)



4)



5)



Q4. Write the missing numbers:

1) 234 , _____ , 236 , 237 , _____ , _____

2) 741 , _____ , 743 , _____ , _____ , 746

3) 129 , _____ , _____ , _____ , 133 , 134

4) 444 , 445 , _____ , _____ , 448 , _____

5) 267 , _____ , _____ , 270 , _____ , _____

Q5. Form the greatest and smallest numbers using the given digits:

Sr.No.	Digit	Greatest number	Smallest number
1.	4, 1, 9		
2.	9, 3, 5		
3.	6, 8, 2		
4.	7, 0, 8		

Q6. Write the place and place value of the underlined digit:

Sr.No.	Number	Place	Place value
1.	46 <u>0</u>		
2.	<u>9</u> 31		
3.	1 <u>4</u> 9		
4.	32 <u>1</u>		

Q7- Add the following:

$$\begin{array}{r} \text{1) H T O} \\ \square \\ 84 \\ + 22 \\ \hline \end{array}$$

$$\begin{array}{r} \text{2) H T O} \\ \square \\ 98 \\ + 41 \\ \hline \end{array}$$

$$\begin{array}{r} \text{3) H T O} \\ 132 \\ + 231 \\ \hline \end{array}$$

$$\begin{array}{r} \text{4) H T O} \\ \square \\ 621 \\ + 249 \\ \hline \end{array}$$

Q. 8. Write in ascending and descending order:

1) 261 , 449 , 338 , 149

Ascending: _____

Descending: _____

2) 392 , 748 , 615 , 520

Ascending: _____

Descending: _____

3) 431 , 829 , 786 , 124

Ascending: _____

Descending: _____

Q.9. Story Sums:

1) Kiya has 23 pink balloons and 15 blue balloons. How many balloons does she have altogether?

<p>Step 1: _____</p> <p>Step 2: _____</p> <p>Step 3: _____</p> <p>Ans: _____</p>	
--	--

2) Rehaan has 64 bouncy balls. Krish has 43 bouncy balls. How many bouncy ball do they have in total?

<p>Step 1: _____</p> <p>Step 2: _____</p> <p>Step 3: _____</p> <p>Ans: _____</p>	
--	--

Q10. HOTS

1) You have blue pants, green pant and a blue shirt, red shirt and orange shirt. How many different outfits can you make?

Ans. _____.